

Name

Roll No.

Father's Name

Centre No.

Marks

Write your email id.....

Date :

Time 3 Hrs.


Max.Marks : 100

Note : Students are required to fill in the boxes at the last page against the correct answer given in (a), (b), (c), (d). For example (a) (b) (c) (d) marks (b) as the right answer. All questions carry equal marks.

- Which number is more than 300 but less than 400 ?
 (a) 450 (b) 250
 (c) 375 (d) 400
- The numeral for the number 'Nine hundred Twelve' is :
 (a) 902 (b) 921
 (c) 912 (d) None of these
- Which of the following is the largest number?
 (a) 884 (b) 899
 (c) 897 (d) 800
- When arranged in order which of the following shows increasing order ?
- Which of the given set of numbers is arranged in decreasing order ?
 (a) 489, 477, 467, 466
 (b) 477, 489, 467, 466
 (c) 489, 477, 466, 467
 (d) 477, 466, 489, 467
- Find the missing number.
 (a) 5
 (b) 6
 (c) 7
 (d) 4
- Find the missing number.
 (a) 5
 (b) 4
 (c) 3
 (d) 6

$$\begin{array}{r} 4 \ 3 \ 5 \\ + 1 \ \square \ 4 \\ \hline 5 \ 9 \ 9 \end{array}$$

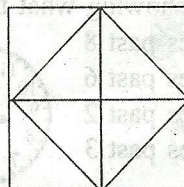
$$\begin{array}{r} 6 \ 3 \ 8 \\ - 2 \ 5 \ \square \\ \hline 3 \ 8 \ 5 \end{array}$$










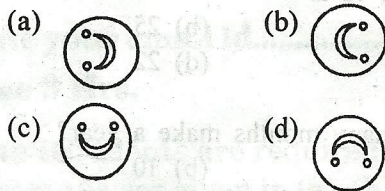

- 351, 531, 315, 513
- 315, 351, 531, 513
- 513, 315, 531, 351
- 315, 351, 513, 531

- Count the number of squares in the given figure.


- 4
- 5
- 6
- 7



9. A cuboid has _____ edges.
 (a) 8 (b) 12
 (c) 6 (d) 10
10. Sphere has _____ curved faces.
 (a) 1 (b) 2
 (c) 0 (d) 3
11. The name of the shape given in adjoining figure is _____.
 (a) Square
 (b) Circle
 (c) Cube
 (d) Cuboid
- 
12. An example of cone is _____.
 (a) Dice
 (b) Ball
 (c) Birthday cap
 (d) Candle
13. The minute hand takes _____ hour to complete one round of a dial.
 (a) 24 (b) 4
 (c) 12 (d) 8
14. The time 12'O clock in the day is called _____.
 (a) A.M. (b) P.M.
 (c) Noon (d) Midnight
15. A fortnight is a period _____ weeks.
 (a) 2 (b) 5
 (c) 3 (d) 4
16. Which month has 30 days?
 (a) July (b) June
 (c) March (d) August
17. The clock is showing what time?
 (a) 30 minutes past 8
 (b) 15 minutes past 6
 (c) 10 minutes past 2
 (d) 35 minutes past 3
- 
18. Tina started walking to the beach at 6:15 pm. She reached the beach at 6:40 pm. How long does she take to walk to the beach?
 (a) 20 minutes (b) 25 minutes
 (c) 30 minutes (d) 35 minutes
19. The clock is 10 minutes fast. If the clock is showing 11:30 am, what is the actual time?
 (a) 11:40 am (b) 11:20 am
 (c) 11:45 am (d) 11:15 am
20. $300 + 40 + 2 =$ _____
 (a) 342 (b) 341
 (c) 304 (d) 324
21. $289 \square 298$
 (a) < (b) >
 (c) = (d) None of these.
22. $799 - 100 =$ _____
 (a) 700 (b) 699
 (c) 689 (d) 709
23. $269 + 548 = \square$
 (a) 817 (b) 818
 (c) 820 (d) 819
24. The expanded form of 521 is :
 (a) $5 + 2 + 1$
 (b) $500 + 20 + 1$
 (c) $500 + 2 + 1$
 (d) $50 + 2 + 1$
25. $100 + 10 + 1 =$
 (a) 1001 (b) 101
 (c) 100 (d) 111
26.  _____
 (a)  (b) 
 (c)  (d) 



29. Which of the following is a square ?



30. The smallest amongst 14, 13, 15, 49, 51 is.

- (a) 14 (b) 15
 (c) 51 (d) 13

31. The greatest amongst 86, 34, 62, 73 is.


- (a) 86 (b) 34
 (c) 62 (d) 73

32. $3 + 3 + 3 + 3 + 3$ is equal to

- (a) 3×4
 (b) 3×3
 (c) 3×5
 (d) 3×6

33. Jay said there are 9 squares. Raj said there are 10 squares and Romy said there are 14 squares. Who is right?

- (a) Jay
 (b) Raj
 (c) Romy
 (d) None




34. How many stars are there in the picture.

- (a) 2
 (b) 5
 (c) 1
 (d) 4



35. How many flowers are there in this bunch?

- (a) 6
 (b) 5
 (c) 4
 (d) 8



36. _____ is the 4th month of the year.

- (a) April
 (b) May
 (c) June
 (d) February


37. 20 paise + 30 paise makes?

- (a) 40 paise
 (b) 60 paise
 (c) 50 paise
 (d) 33 paise

38. The second day of the week is

- (a) Sunday
 (b) Tuesday
 (c) Monday
 (d) Wednesday

39. Re-arrange in order Triangle, Circle, Square.



- (a) T.V. (b) Kite (c) Sun
 (a) a, b, c (b) b, c, a
 (c) c, b, a (d) None of above

40. How many Sleeping lines are there in the racket

- (a) 15
 (b) 14
 (c) 10
 (d) 9



Badminton


41. How many Ballons are there totals.

- (a) 10
- (b) 6
- (c) 8
- (d) 3



42. I ate 2 Bananas. My Mother gave me more. How many Bananas did I eat totally.

- (a) 5
- (b) 3
- (c) 2
- (d) 1



46. 4 hundreds + 5 tens + 7 one = _____.

- (a) 475
- (b) 457
- (c) 574
- (d) 754

47. Which is the greatest number?

- (a) 1001
- (b) 1005
- (c) 1150
- (d) 1110

48. Half of 40 is

- (a) 20
- (b) 25
- (c) 18
- (d) 22

43. What is the 1 more than fifty six.

- (a) 55
- (b) 50
- (c) 57
- (d) 52

49. How many months make a year?

- (a) 6
- (b) 10
- (c) 12
- (d) 15

44. Put >, < (or) = 58 58

- (a) >
- (b) =
- (c) <
- (d) +

50. Which day comes between Wednesday and Friday?

- (a) Saturday
- (b) Thursday
- (c) Sunday
- (d) Tuesday

45. Write the next number in the series 4, 8, 5, 9, 6, 10, 7, _____

- (a) 11
- (b) 12
- (c) 14
- (d) 13

14 ANSWER BLOCK - 02				
1. <input type="text"/>	11. <input type="text"/>	21. <input type="text"/>	31. <input type="text"/>	41. <input type="text"/>
2. <input type="text"/>	12. <input type="text"/>	22. <input type="text"/>	32. <input type="text"/>	42. <input type="text"/>
3. <input type="text"/>	13. <input type="text"/>	23. <input type="text"/>	33. <input type="text"/>	43. <input type="text"/>
4. <input type="text"/>	14. <input type="text"/>	24. <input type="text"/>	34. <input type="text"/>	44. <input type="text"/>
5. <input type="text"/>	15. <input type="text"/>	25. <input type="text"/>	35. <input type="text"/>	45. <input type="text"/>
6. <input type="text"/>	16. <input type="text"/>	26. <input type="text"/>	36. <input type="text"/>	46. <input type="text"/>
7. <input type="text"/>	17. <input type="text"/>	27. <input type="text"/>	37. <input type="text"/>	47. <input type="text"/>
8. <input type="text"/>	18. <input type="text"/>	28. <input type="text"/>	38. <input type="text"/>	48. <input type="text"/>
9. <input type="text"/>	19. <input type="text"/>	29. <input type="text"/>	39. <input type="text"/>	49. <input type="text"/>
10. <input type="text"/>	20. <input type="text"/>	30. <input type="text"/>	40. <input type="text"/>	50. <input type="text"/>